




HOME LINK
6•2
More Line Segments, Rays, and Lines


Family Note Refer to the following notations to help your child draw and label line segments, rays, and lines.

line segment AB	\overline{AB}	
ray BA	\overrightarrow{BA}	
line AB	\overleftrightarrow{AB}	

Please return this Home Link to school tomorrow.




Use a straightedge and a sharp pencil to draw the following. Be sure to mark points and label the line segments, rays, and lines.

1. Draw line segment \overline{YZ} , that is parallel to \overline{AB} .



2. Draw a ray, \overrightarrow{CD} , that intersects \overleftrightarrow{EF} .



3. Draw two parallel rays, \overrightarrow{IS} and \overrightarrow{NO} .

4. Draw two intersecting lines, \overleftrightarrow{MY} and \overleftrightarrow{AN} .

5. Draw a line segment \overline{PO} intersecting ray \overrightarrow{LA} .

6. Draw line \overleftrightarrow{PU} , parallel to ray \overrightarrow{RA} .