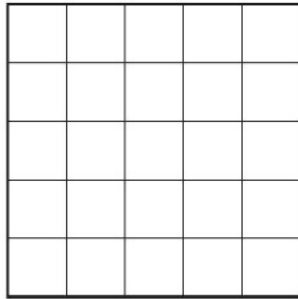


LESSON
7•1
Square and Rectangular Arrays


Follow these steps:

1. Use centimeter cubes to build arrays for each fact.
2. Record the arrays on the grids.
3. Name the shapes of the arrays.
4. Write the number models that match the arrays.

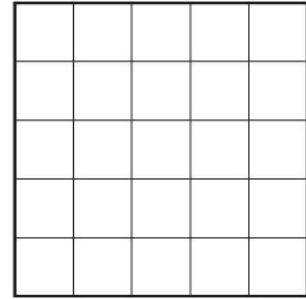
1. 3×3



The shape is a _____.

Number model: _____

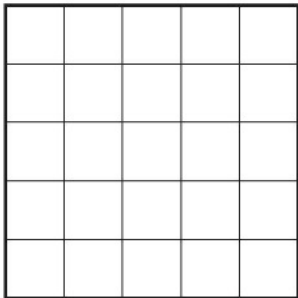
2. 3×4



The shape is a _____.

Number model: _____

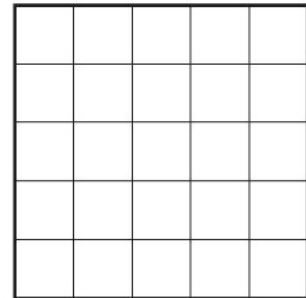
3. 4×5



The shape is a _____.

Number model: _____

4. 4×4



The shape is a _____.

Number model: _____

Compare the shapes and the number models for different arrays. What patterns do you see?
