

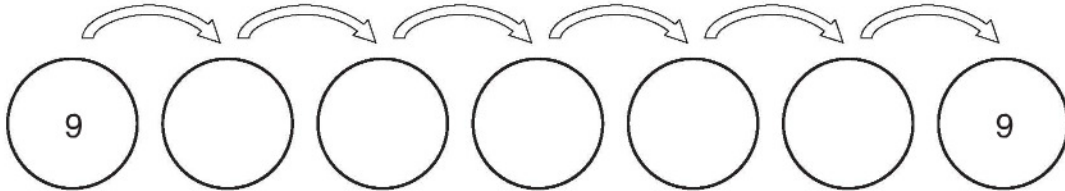
**LESSON**  
**7•3**
**Frames-and-Arrows Puzzles**


Each puzzle has two rules. For each puzzle, color the arrow for one rule red and color the arrow for the other rule blue. For Problems 1 through 3, figure out where to place the rules to solve the problems. You may use your calculator.

1.

$\times 9$

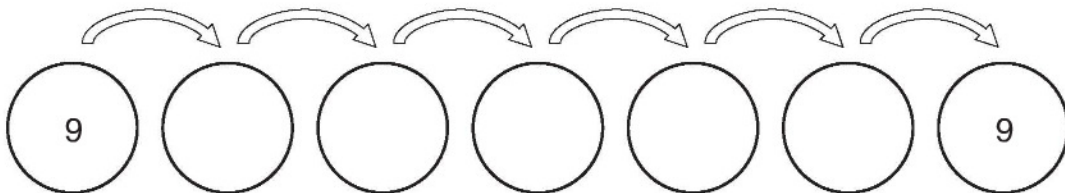
$\div 3$



2. Find another way.

$\times 9$

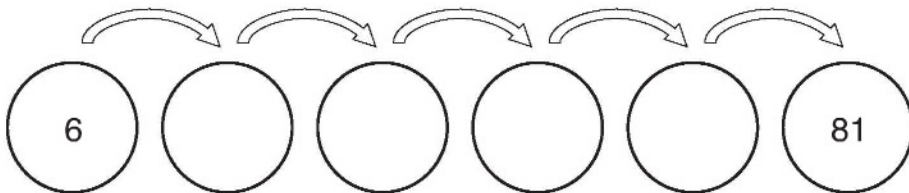
$\div 3$



3.

$\times 6$

$\div 4$



4. Make up a puzzle. Ask a partner to solve it.

$\square$

$\square$

